

Integer Review

Show your work on another sheet of paper

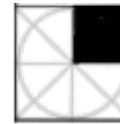
Name: _____

50	0	-12	-3	19	20
0	-12	181	7	-4	-56
45	5	-20	-2	3	-10
-6	-18	102	102	-18	-45
-8	4	10	4	10	-63
-50	-5	65	-5	65	1


Solve:



1. $4 + ^{-}6 =$



2. $^{-}11 + 5 =$



3. $11 - 16 =$




4. $30 - ^{-}72 =$



5. $^{-}4 * ^{-}5 =$



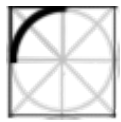
6. $4 * ^{-}5 =$



7. $^{-}9 * ^{-}5 =$



8. $^{-}90 \div 5 =$



9. $^{-}14 - ^{-}2 =$




10. $^{-}72 / 9 =$



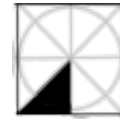
11. $33 + ^{-}23 =$



12. $^{-}4 - ^{-}8 =$



13. $^{-}19 + 84 =$



14. $100 - ^{-}81 =$




15. $^{-}8 + ^{-}2 =$



16. $^{-}21 \div ^{-}7 =$



17. $^{-}12 - ^{-}13 =$



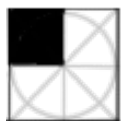
18. $32 \div ^{-}8 =$




19. $^{-}4 + 9 =$



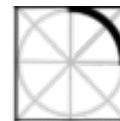
20. $7 * ^{-}9 =$



21. $^{-}9 * 5 =$



22. $^{-}20 - 30 =$



23. $^{-}4 + 6 + ^{-}6 + 4 =$