

Order of Operations Review

Show your work!

Name: _____

		-19	-10		
	-8	-7	-3	-2	
	-1	1	4	5	
9	12	15	15	19	22
27	32	39	47	49	93

Solve:



1. $19 + 1 * 3 =$




2. $-4 + 3(50 \div -10) =$



3. $9 - 2 - 3 + 18 * 0 =$




4. $\frac{2 + 76}{2} =$



5. $9 - 1 + 4 =$



6. $2 + 6 * 5 =$



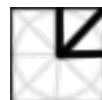
7. $2 - 8 + 5 =$



8. $15 + 8 * 5 - 6 =$



9. $5 + 7 * 9 \div 3 * 2 =$



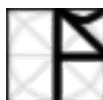
10. $40 \div 2 - 7 + 3 * 2 =$



11. $-1 * 6 - 2 * 8 \div 4 =$



12. $-1 + 4 - 7 + 2 - 5 =$



13. $6 \div 2(2 + 1) =$



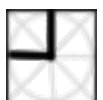
14. $3^2 \div 180 * 0 + 3(33 - 2) =$



15. $6(5 - 3)^2 + 3 =$



16. $30 \div 4 * 2 =$



17. $\frac{2(7 + 3) - 1}{11 + 8} =$



18. $\frac{2 * 9}{3 - 9} =$



19. $(3 + 2)^2 \div 5 =$

